



Name :

Date :

Grade : III

Worksheet

Submission Date :

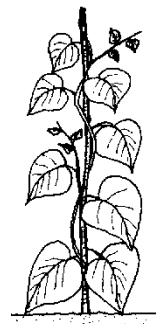
Subject : Science

Parent's sign :


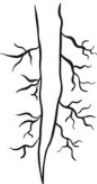





LESSON 2 – THE WORLD OF GREEN

I. Choose the correct answer

- Which of the following is not an example of a taproot system?
a. Coriander plant b. Chilliplant c. Oak tree d. Grass
- Rose, hibiscus, and cotton are examples for _____ based on the similarities of their stems.
a. herbs b. shrubs c. trees d. climbers
- Which of the following types of plants have a weak stem, cannot grow upright on their own and depend on other structures for support?
a. Creepers b. Climbers c. Herbs d. Shrubs
- Which of the following statements is valid for herbs?
a. They have a hard woody stem with branches.
b. They have a weak stem that cannot grow upright without support.
c. They have a thin, slender, and green stem.
d. They have a weak stem that can creep on the ground.
- Which of the following is not true about trees?
a. They are usually tall.
b. They have a thick, woody, and strong stem.
c. They need support to grow upright.
d. Mango, neem, and coconut are examples of trees.
- What is the characteristic of the plant whose picture is shown?
a. The plant has hard and strong stem.
b. The plant is small with soft stem.
c. The plant has weak stem and it grows along the ground.
d. The plant has weak stem and it needs support to stand and grow.



II. Match the following

S.No.	Column A	Column B
1		Shrub
2		Climber
3		Creeper
4		Fibrous root
5		Tree
6		Herb
7		Tap root